

## Cálculo A

### Limites laterais

Calcule os limites laterais das funções dadas

1.

$$f(x) = \begin{cases} 2 & \text{se } x < 1 \\ -1 & \text{se } x = 1 \\ -3 & \text{se } x > 1 \end{cases}$$

$$\lim_{x \rightarrow 1^+} f(x), \quad \lim_{x \rightarrow 1^-} f(x), \quad \lim_{x \rightarrow 1} f(x)$$

2.

$$f(x) = \begin{cases} -2 & \text{se } x < 0 \\ 2 & \text{se } x \geq 0 \end{cases}$$

$$\lim_{x \rightarrow 0^+} f(x), \quad \lim_{x \rightarrow 0^-} f(x), \quad \lim_{x \rightarrow 0} f(x)$$

3.

$$f(t) = \begin{cases} t + 4 & \text{se } t \leq -4 \\ 4 - t & \text{se } t > -4 \end{cases}$$

$$\lim_{t \rightarrow -4^+} f(t), \quad \lim_{t \rightarrow -4^-} f(t), \quad \lim_{t \rightarrow -4} f(t)$$

4.

$$g(s) = \begin{cases} s + 3 & \text{se } s \leq -2 \\ 3 - s & \text{se } s > -2 \end{cases}$$

$$\lim_{s \rightarrow -2^+} g(s), \quad \lim_{s \rightarrow -2^-} g(s), \quad \lim_{s \rightarrow -2} g(s)$$

5.

$$F(x) = \begin{cases} x^2 & \text{se } x \leq 2 \\ 8 - 2x & \text{se } x > 2 \end{cases}$$

$$\lim_{x \rightarrow 2^+} F(x), \quad \lim_{x \rightarrow 2^-} F(x), \quad \lim_{x \rightarrow 2} F(x)$$

6.

$$h(x) = \begin{cases} 2x + 1 & \text{se } x < 3 \\ 10 - x & \text{se } x \geq 3 \end{cases}$$

$$\lim_{x \rightarrow 3^+} h(x), \quad \lim_{x \rightarrow 3^-} h(x), \quad \lim_{x \rightarrow 3} h(x)$$

7.

$$g(r) = \begin{cases} 2r + 3 & \text{se } r < 1 \\ 2 & \text{se } r = 1 \\ 7 - 2r & \text{se } r > 1 \end{cases}$$

$$\lim_{r \rightarrow 1^+} g(r), \quad \lim_{r \rightarrow 1^-} g(r), \quad \lim_{r \rightarrow 1} g(r)$$

8.

$$g(t) = \begin{cases} 3 + t^2 & \text{se } t < -2 \\ 0 & \text{se } t = -2 \\ 11 - t^2 & \text{se } t > -2 \end{cases}$$

$$\lim_{t \rightarrow -2^+} g(t), \quad \lim_{t \rightarrow -2^-} g(t), \quad \lim_{t \rightarrow -2} g(t)$$

9.

$$f(x) = \begin{cases} x^2 - 4 & \text{se } x < 2 \\ 4 & \text{se } x = 2 \\ 4 - x^2 & \text{se } x > 2 \end{cases}$$

$$\lim_{x \rightarrow 2^+} f(x), \quad \lim_{x \rightarrow 2^-} f(x), \quad \lim_{x \rightarrow 2} f(x)$$

10.

$$f(x) = \begin{cases} 2x + 3 & \text{se } x < 1 \\ 4 & \text{se } x = 1 \\ x^2 + 2 & \text{se } x > 1 \end{cases}$$

$$\lim_{x \rightarrow 1^+} f(x), \quad \lim_{x \rightarrow 1^-} f(x), \quad \lim_{x \rightarrow 1} f(x)$$

11.  $F(x) = |x - 5|$

$$\lim_{x \rightarrow 5^+} F(x), \quad \lim_{x \rightarrow 5^-} F(x), \quad \lim_{x \rightarrow 5} F(x)$$

12.  $f(x) = 3 + |2x - 4|$

$$\lim_{x \rightarrow 2^+} f(x), \quad \lim_{x \rightarrow 2^-} f(x), \quad \lim_{x \rightarrow 2} f(x)$$

13.  $G(x) = |2x - 3| - 4$

$$\lim_{x \rightarrow \frac{3}{2}^+} G(x), \quad \lim_{x \rightarrow \frac{3}{2}^-} G(x), \quad \lim_{x \rightarrow \frac{3}{2}} G(x)$$

14.

$$F(x) = \begin{cases} |x - 1| & \text{se } x < -1 \\ 0 & \text{se } x = -1 \\ |1 - x| & \text{se } x > -1 \end{cases}$$

$$\lim_{x \rightarrow -1^+} F(x), \quad \lim_{x \rightarrow -1^-} F(x), \quad \lim_{x \rightarrow -1} F(x)$$

15.  $f(x) = \frac{|x|}{x}$

$$\lim_{x \rightarrow 0^+} f(x), \quad \lim_{x \rightarrow 0^-} f(x), \quad \lim_{x \rightarrow 0} f(x)$$

16.  $f(x) = 2^{\frac{1}{x}}$

$$\lim_{x \rightarrow 0^+} f(x), \quad \lim_{x \rightarrow 0^-} f(x), \quad \lim_{x \rightarrow 0} f(x), \\ \lim_{x \rightarrow -\infty} f(x), \quad \lim_{x \rightarrow \infty} f(x)$$

17.  $f(x) = \frac{|x-3|}{x-3}$

$$\lim_{x \rightarrow 3^+} f(x), \quad \lim_{x \rightarrow 3^-} f(x), \quad \lim_{x \rightarrow 3} f(x)$$

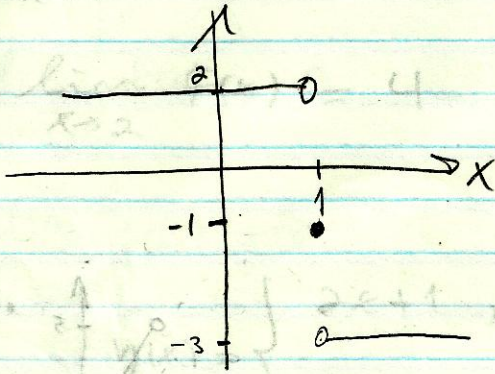
### Resposta

1.  $-3, 2, \nexists$

2.  $2, -2, \nexists$

3.  $8, 0, \frac{1}{2}$
4.  $5, 1, \frac{1}{2}$
5.  $4, 4, 4$
6.  $7, 7, 7$
7.  $5, 5, 5$
8.  $7, 7, 7$
9.  $0, 0, 0$
10.  $3, 5, \frac{1}{2}$
11.  $0, 0, 0$
12.  $3, 3, 3$
13.  $-4, -4, -4$
14.  $2, 2, 2$
15.  $1, -1, \frac{1}{2}$
16.  $+\infty, 0, \frac{1}{2}, 1, 1$
17.  $1, -1, \frac{1}{2}$

$$1. \quad f(x) = \begin{cases} 2, & x < 1 \\ -1, & x = 1 \\ 4-3, & 1 < x \end{cases}$$

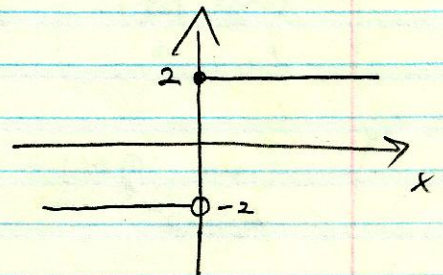


a)  $\lim_{x \rightarrow 1^+} f(x) = 1$

b)  $\lim_{x \rightarrow 1^-} f(x) = 2$

c)  $\lim_{x \rightarrow 1} f(x)$  nicht existiert

$$2. \quad f(x) = \begin{cases} -2, & x < 0 \\ 2, & 0 \leq x \end{cases}$$



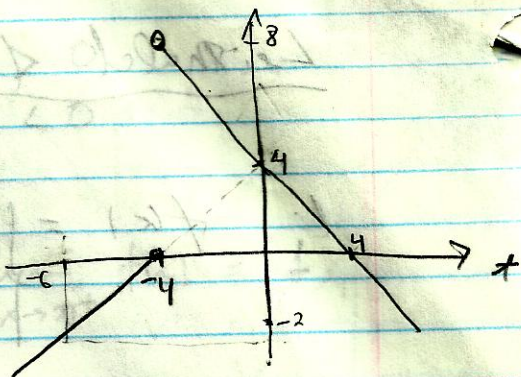
$\lim_{x \rightarrow 0^+} f(x) = 2$

$\lim_{x \rightarrow 0^-} f(x) = -2$

$\lim_{x \rightarrow 0} f(x)$  nicht existiert

3.

$$f(x) = \begin{cases} x+4, & x \leq -4 \\ 4-x, & -4 < x \end{cases}$$



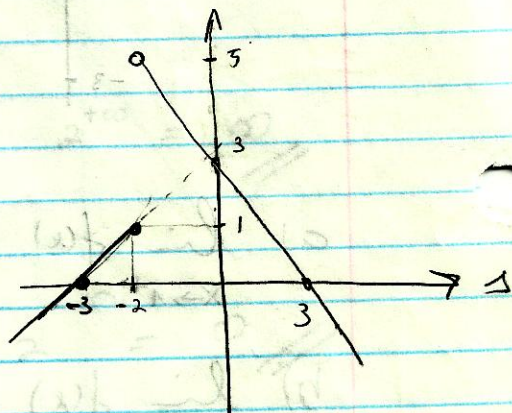
$$\lim_{x \rightarrow -4^+} f(x) = 8$$

$$\lim_{x \rightarrow -4^-} f(x) = 0$$

$\lim_{x \rightarrow -4} f(x)$  não existe


4.

$$g(s) = \begin{cases} s+3, & s \leq -2 \\ 3-s, & -2 < s \end{cases}$$



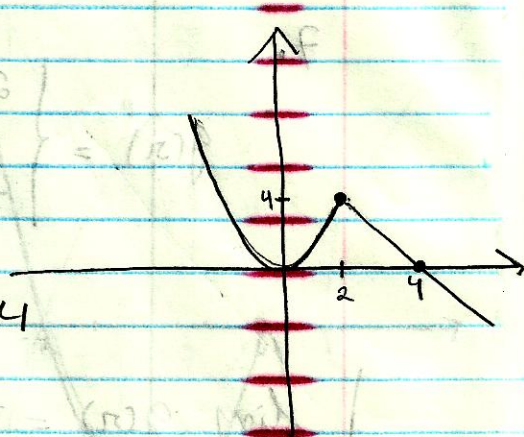
$$\lim_{s \rightarrow -2^+} g(s) = 5, \quad \lim_{s \rightarrow -2^-} g(s) = 1$$

$\lim_{s \rightarrow -2} g(s)$  não existe



$$5. \quad F(x) = \begin{cases} x^2, & x \leq 2 \\ 8-2x, & 2 < x \end{cases}$$

$$\left. \begin{aligned} \lim_{x \rightarrow 2^+} F(x) &= 4, & \lim_{x \rightarrow 2^-} F(x) &= 4 \\ \lim_{x \rightarrow 2} F(x) &= 4 \end{aligned} \right\}$$

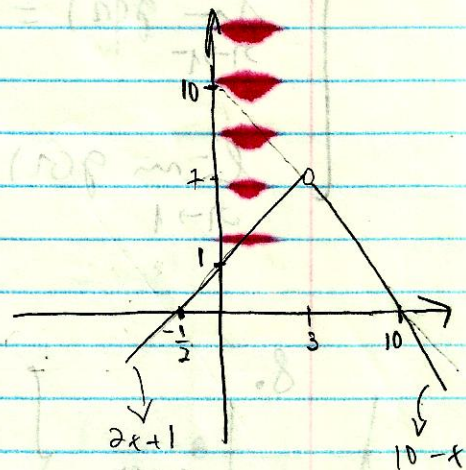


$$6. \quad h(x) = \begin{cases} 2x+1, & x < 3 \\ 10-x, & 3 \leq x \end{cases}$$

$$\lim_{x \rightarrow 3^+} h(x) = 7$$

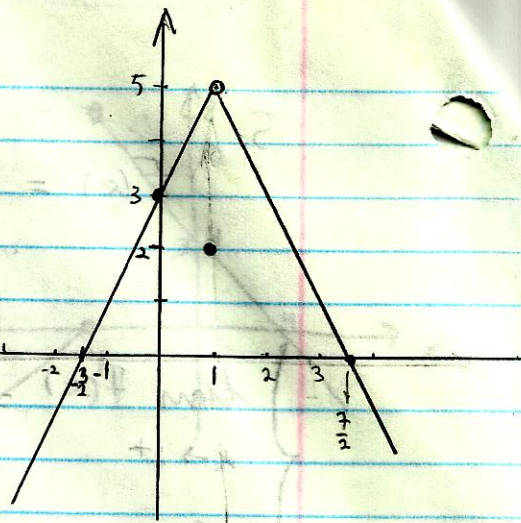
$$\lim_{x \rightarrow 3^-} h(x) = 7$$

$$\lim_{x \rightarrow 3} h(x) = 7$$



7.

$$g(x) = \begin{cases} 2x+3, & x < 1 \\ 2, & x = 1 \\ 7-2x, & 1 < x \end{cases}$$



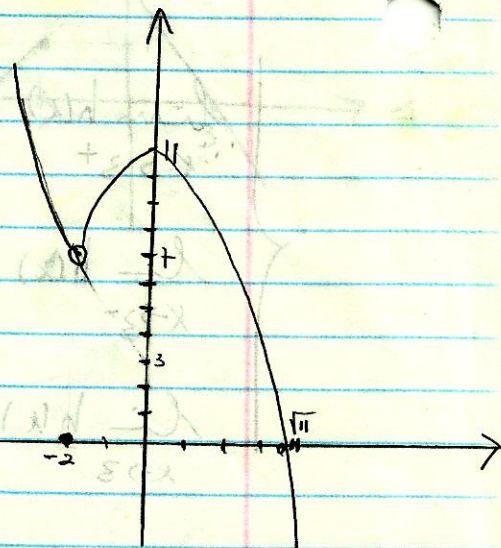
$$\lim_{x \rightarrow 1^+} g(x) = 5$$

$$\lim_{x \rightarrow 1^-} g(x) = 5$$

$$\lim_{x \rightarrow 1} g(x) = 5$$

8.

$$g(x) = \begin{cases} 3+x^2, & x < -2 \\ 0, & x = -2 \\ 11-x^2, & -2 < x \end{cases}$$



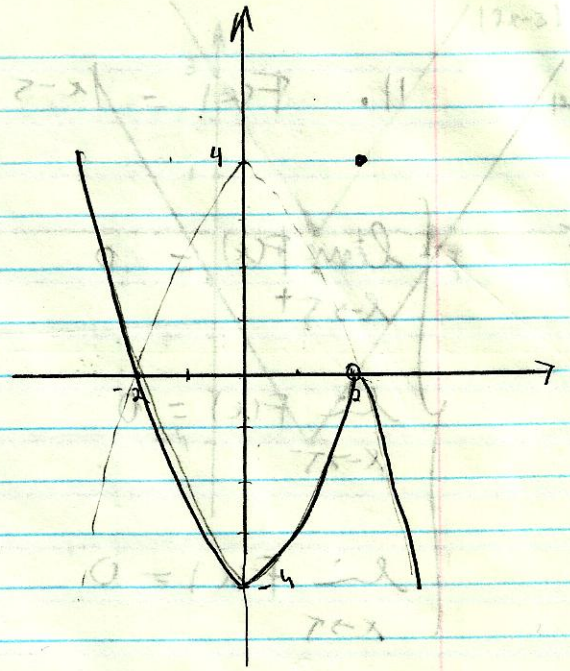
$$\lim_{x \rightarrow -2^+} g(x) = 7$$

$$\lim_{x \rightarrow -2^-} g(x) = 7$$

$$\lim_{x \rightarrow -2} g(x) = 7$$

9.

$$f(x) = \begin{cases} x^2 - 4, & x < 2 \\ 4, & x = 2 \\ 4 - x^2, & 2 < x \end{cases}$$



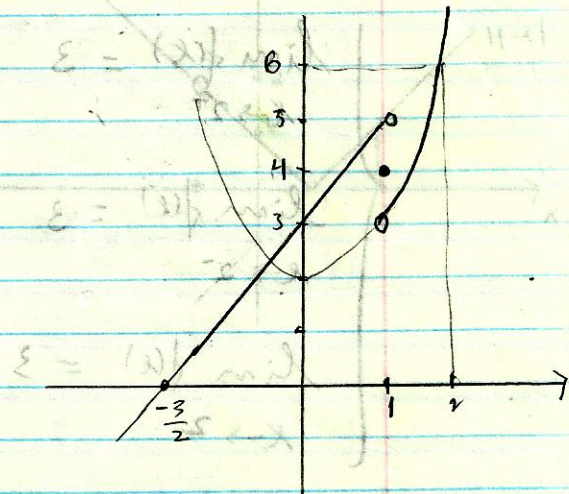
$$\lim_{x \rightarrow 2^+} f(x) = 0$$

$$\lim_{x \rightarrow 2^-} f(x) = 0$$

$$\lim_{x \rightarrow 2} f(x) = 0$$

10.

$$f(x) = \begin{cases} 2x + 3, & x < 1 \\ 4, & x = 1 \\ x^2 + 2, & 1 < x \end{cases}$$



$$\lim_{x \rightarrow 1^+} f(x) = 3$$

$$\lim_{x \rightarrow 1^-} f(x) = 5$$

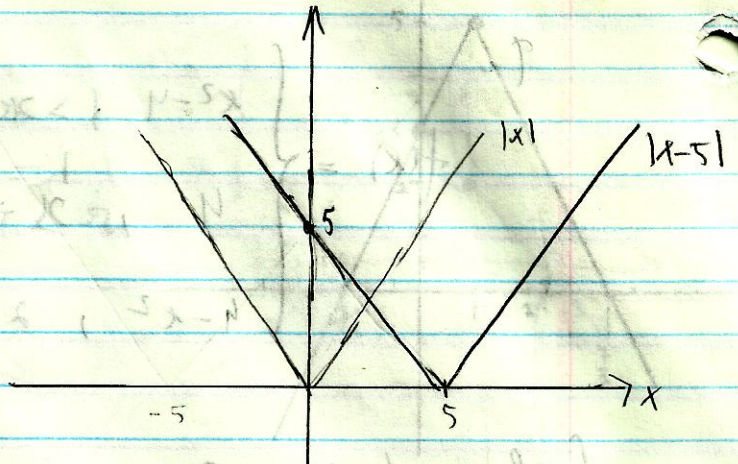
$$\lim_{x \rightarrow 1} f(x) = \text{not exist}$$

11.  $f(x) = |x-5|$

$\lim_{x \rightarrow 5^+} f(x) = 0$

$\lim_{x \rightarrow 5^-} f(x) = 0$

$\lim_{x \rightarrow 5} f(x) = 0$



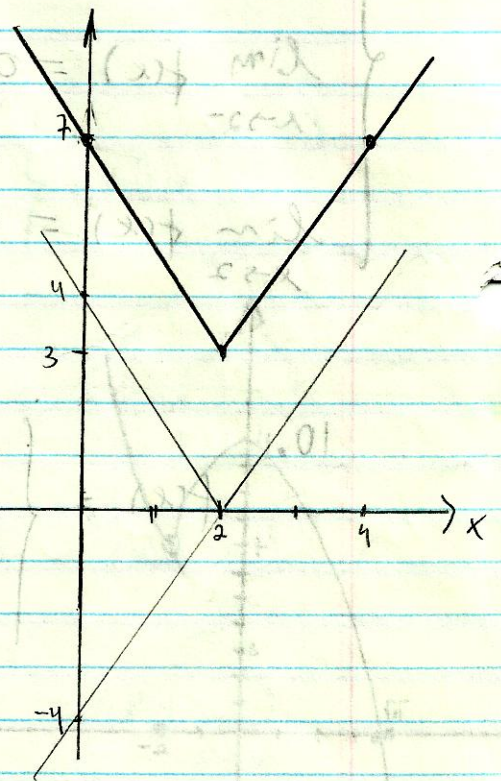
12.

$f(x) = 3 + |2x-4|$

$\lim_{x \rightarrow 2^+} f(x) = 3$

$\lim_{x \rightarrow 2^-} f(x) = 3$

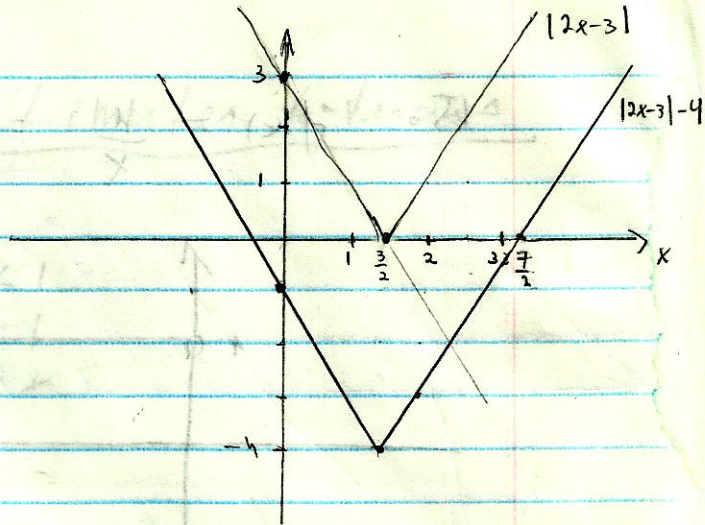
$\lim_{x \rightarrow 2} f(x) = 3$





13.

$$G(x) = |2x-3| - 4$$



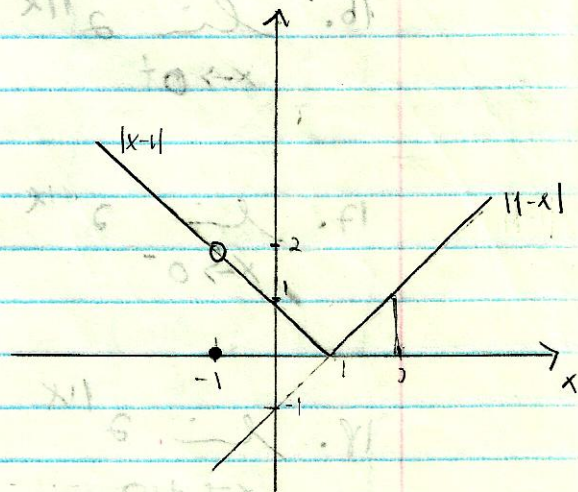
$$\lim_{x \rightarrow \frac{3}{2}^+} G(x) = -4$$

$$\lim_{x \rightarrow \frac{3}{2}^-} G(x) = -4$$

$$\lim_{x \rightarrow \frac{3}{2}} G(x) = -4$$

14.

$$F(x) = \begin{cases} |x-1|, & x < -1 \\ 0, & x = -1 \\ |1-x|, & -1 < x \end{cases}$$

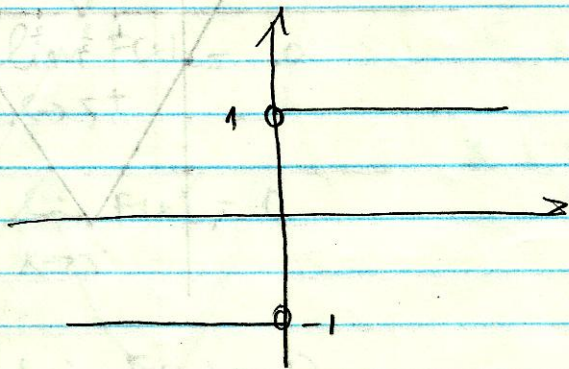


$$\lim_{x \rightarrow -1^+} F(x) = 2$$

$$\lim_{x \rightarrow -1^-} F(x) = 2$$

$$\lim_{x \rightarrow -1} F(x) = 2$$

$$15. f(x) = \frac{|x|}{x} = \begin{cases} 1, & x > 0 \\ -1, & x < 0 \end{cases}$$



$$\lim_{x \rightarrow 0^+} f(x) = 1$$

$$\lim_{x \rightarrow 0^-} f(x) = -1$$

$$\lim_{x \rightarrow 0} f(x) = \text{nicht exist.}$$

$$16. \lim_{x \rightarrow 0^+} 2^{1/x} = 2^{\lim_{x \rightarrow 0^+} 1/x} = 2^{+\infty} = \infty //$$

$$\lim_{x \rightarrow 0^-} 2^{1/x} = 2^{\lim_{x \rightarrow 0^-} 1/x} = 2^{-\infty} = 0 //$$

$$\lim_{x \rightarrow +\infty} 2^{1/x} = 2^{\lim_{x \rightarrow +\infty} 1/x} = 2^{0^+} = 1 //$$

$$\lim_{x \rightarrow -\infty} 2^{1/x} = 2^{\lim_{x \rightarrow -\infty} 1/x} = 2^{0^-} = 1 //$$

$$17. \lim_{x \rightarrow 3^+} \frac{|x-3|}{x-3} = \lim_{x \rightarrow 3^+} \frac{x-3}{x-3} = 1$$

$$\lim_{x \rightarrow 3^-} \frac{|x-3|}{x-3} = \lim_{x \rightarrow 3^-} \frac{-(x-3)}{x-3} = -1$$

$$\lim_{x \rightarrow 3} \frac{|x-3|}{x-3} \neq$$